

**Primary 7 English Revision exercise 14: Advertisements****Exercise 1**

Below is a record kept by a P7 class monitor at Divine Junior School, Nalusaga. It shows the pupils in charge of cleaning the P& classroom each morning for one week, their supervisors, and comments made each day. Study it carefully and then answer, in full sentences, the questions that follow.

WEEK FIVE, TERM TWO (2024)

Day	Pupils responsible	Supervisor	Comment
Monday	- Muluma Felix - Asio Marium - Maiso Toni	Acen Lisa	Work done well!
Tuesday	- Oketcho James - Mangara Richard - Auma Dora	Tamale Fred	Work Incomplete Part of the classroom not cleaned
Wednesday	- Mafabi Leo - Apio Liz - Oyo Joseph	Nassanga Esther	Excellent work done!
Thursday	- Sidia Sania - Akasiima Noet - Bwambale Tito	Musoke Edwin	Classroom cleaned at break time
Friday	- Candiru Joan - Chelimo Aziz - Abalo Phlona	Edema Philip	Cleaning not done. Zonal ball games

- (a) Who kept the above record?
.....
.....
- (b) When was the above record kept?
.....
.....
- (c) How many pupils were in charge of cleaning the classroom each day?
.....
.....
- (d) Why work was considered incomplete on Tuesday?
.....
.....
- (e) How many pupils supervised the cleaning of the classroom that week?
.....
.....
- (f) On which day was excellent work done?
.....
.....
- (g) Which pupils cleaned the classroom at break time?
.....
.....
- (h) Why wasn't the classroom cleaned on Friday?
.....
.....
- (i) What was the role of Acen Lisa according to above record?
.....
.....
- (j) Why would you encourage your class monitor to keep such a record?
.....
.....

Exercise 2

The document below was used for paying school fees in one of the banks. Study it carefully and then answer, in full sentences, the questions that follow.

GRAND BANK	
BANK PAY-IN SLIP	
SCHOOL NAME: KARIBU BOARDING PRIMARY SCHOOL	
ACCOUNT NUMBER: 301000162977	
PUPIL'S NAME: KUSASIRA MARTHA	
CLASS: P7	
DATE: 18/09/2023	
NOTES/COINS	amount
50,000=	50,000/=
20,000=	80,000/=
10,000=	20,000/=
5,000=	-
2,000=	-
1,000=	-
500=	-
200=	-
100=	-
50=	-
Bank charge	3,000/=
Total	153,000/=

Total amount paid in words: One hundred fifty-three thousand shillings only

Paid in by: Nera Timothy Sign: neratim

Received by: Nalutaya Agnes

- (a) What is the above document called?
.....
- (b) In which bank was the document was used?
.....
- (c) For which school is the above document?
.....
- (d) Who school fes was paid using the above document
.....
.....
- (e) Why was it important to indicate the pupil’s class on this document
.....
.....
- (f) When was the above document used?
.....
- (g) How much money was paid using notes of twenty thousand shilling?
.....
.....
- (h) How much money was paid as school fees?
.....
.....
- (i) Who took the fees to the bank?
.....

Exercise 3

The Primary Seven weekly revision timetable below was found at Mt. Ogura Primary School. Study it carefully and then answer in full sentences the questions that follow.

Day	Time	Subject	Pupil in charge
Mon.	7.30pm – 9.00pm	Ennglish	Kutosi Isaac
Tue	8.00pm – 9.30pm	Mathematics	Wandira Gabby
Thur.	8.00pm – 9.00pm	Social Studies with Religious Education	Kiggundu Tendo
Fri.	7.00pm – 9.00pm	Science	Kutosi Isaac
Sat.	8.00pm – 9.00pm	English	Muyodi Presh

- (a) Where was the weekly revision time table found?
.....
- (b) On which day did pupils revise Social Studies with Religious Education?
.....
- (c) How many pupils were in charge of revision that week?
.....
- (d) Which pupil was in charge of revision on Saturday?
.....
- (e) For how long did the pupil revise mathematics that week?
.....

Exercise 4

The games and sports teacher of Atekere Junior School wrote and put the following information on the school notice board. Study it carefully and then answer in full sentences the questions that follow.

Volleyball!! Volleyball!!

Atekere Junior School versus Star Primary School

Date: 11th November 2025

Venue: Atekere Junior School playground

Time: 5.00pm – 6.35pm

Guest of Honour: MP Mbale City

Come one! Come all!

- (a) Who wrote the information?
.....
- (b) What is the information about?
.....
- (c) Where will the match take place?
.....
- (d) At what time the match begins?
.....
- (e) Who is expected to be the Guest of Honour?
.....

Exercise 5

Below is an extract from Mukumer HealthCenter III record, taken on 27th February, 2021. Study it carefully and then answer in full sentences the questions that follow

S/N	Name of patient	Sex	Age	Disease	Comment on treatment
1.	Magunda Peter	M	50	Malaria	Given tablets
2.	Obisa Vincent	M	15	Cholera	Admitted for one week
3.	Achieng Matilda	F	85	Cough	Given tablets
4.	Drako Silver	M	2	Diarrhoea	Given oral rehydration salts and deworming
5.	Musoke Usaini	M	6	Malaria	Injections for 2 days
6.	Akware Margaret	F	30	Malaria	Injections for 2 days
7.	Tusiime Alawi	M	4	Measles	Injections for 2 days
8.	Nyayuk Mary	F	36	Diarrhoea	Given oral rehydration salts and deworming
9.	Muntu David	M	40	Tuberculosis	referred

Compiled by Dr. Paul Kibirige

- (a) From which health centre was this record extracted?
.....
- (b) When was the extract written?
.....
- (c) How many patients recorded in this extract?
.....
- (d) Mention the number of female patients who received treatment from Mukumer Health Centre III
.....
.....
- (e) Why do you think Achieng Matilda would easily suffer from COVID-19?

.....
.....
(f) Why was Obisa Vincent admitted?

.....
(g) What should people around this Health Centre III do to avoid malaria?

.....
(h) Which patient was not treated at this Health centre?

.....
(i) Why should Drako silver and Nyaruk Mary be treated using oral rehydration salts?

.....
(j) Who compiled the extract?
.....

Exercise 6

A health parade was conducted in Pambaya Model School during the week. This was to help learners improve on their personal hygiene. The prefects helped in the checking. Study the table below carefully and then answer in full sentences the questions that follow.

Days	Areas Checked	Class	No. of Boys	No. of Girls	Name of Prefect	Name of Supervisor (Teacher)
MONDAY	Uncombed hair	P.1	7	4	Atwine Sabiti	Mr. Masaba Isaac
		P.2	2	2	Nabirye Maureen	
		P.3	5	3	Wano Rehema	
TUESDAY	Unbrushed teeth	P.1	6	3	Akasime Michelle	Mr. Kitimbo Ian
		P.2	1	1	Mukasa Luke	
		P.3	0	0	Mugisha Ivan	
WEDNESDAY	Dirty body	P.1	8	4	Nabirye Maureen	Mrs Aisu Rehema
		P.2	2	0	Wano Rehema	
		P.3	6	4	Akasime Michelle	
FRIDAY	Dirty uniforms	P.1	16	10	Mugisha Ivan	Mr. Masaba Isaac
		P.2	5	3	Okello Eria	
		P.3	4	1	Nabirye Maureen	

*By Mrs Haumba Rehema
(Sanitation teacher)*

(a) Which school carried out the above activity?

.....
.....

(b) What did Atwine Sabiti do on Monday?

.....
.....

(c) How many boys had dirty bodies in P.1 on Wednesday?

.....
.....
(d) What happened to boys and girls in P.3 class on Tuesday?
.....
.....

(e) What was the total number of girls who had dirty uniforms?
.....
.....

(f) Which prefect checked on the personal hygiene three times?
.....
.....

(g) How many teachers supervised the exercise?
.....
.....

(h) On which day of the week was the checking not done?
.....
.....

(i) Who was in charge of sanitation in the school?
.....
.....

(j) Why do you think the school should carry out health parades?
.....
.....

Exercise 7

The following candidates sat PLE in Super Primary School in 2017.

Below is how they performed. Study the information carefully and then answer in full sentences the questions that follow.

Candidate's name	Index.no	Sex	Age	MTC	SST	SCI	ENG	Agg.	Div
Apio Mary	001	F	15	1	2	2	1	6	I
Ayu Damalie	002	F	12	X	X	X	X	X	CS
Nakya Lucy	003	F	11	6	2	3	2	13	II
Kajubi Daniel	004	M	17	2	1	1	2	6	I
Onapa James	005	M	13	7	7	6	2	22	II
Pesa Martha	006	F	15	2	3	3	1	9	I
Sebabi Twaha	007	M	12	3	6	4	1	14	II
Sagula Moses	008	M	13	1	1	1	1	4	I
Talemwa Tabisa	009	F	14	9	8	8	9	34	U
Welishe Hadad	010	M	15	2	X	X	1	X	X

Key:

F - female

X - Absent

CS - Changed school

M - Male

U - Un graded

Questions

(a) What does the table show?

.....
.....

(b) How many candidates sat all the papers?

.....
.....

(c) Who was the best candidate in this class?

.....
.....

(d) Which candidate could have gone to another school?

.....
.....

(e) Who was the youngest candidate in this class

.....
.....

(f) Which subject was done best?

.....
.....

(g) What do you think happened to Welishe Hadad not to be graded?

.....
.....

(h) How many candidates were females?

.....
.....

(i) Who got grade nine (9) in Mathematics?

.....
.....

.....
.....
(e) On what date will the event start?

.....
.....
(f) What do you think will excite children at the venue?

.....
.....
(g) Why do you think most people will arrive early?





.....
.....
(h) Who wrote this advertisement?

.....
.....
(i) When was the advertisement written?

Exercise 9

The map below shows part of Rombo village. Study it carefully and then answer in full sentence, the question that follow.



	JAGWER'S POST
	POLICE POST
	BOREHOLE
	HEALTH CENTER

(a) What does the map show?

.....

(b) Which road would Jagwer's children take to reach school?

.....

(c) Which building is near the borehole?

.....

(d) What is opposite the health centre?

.....

(e) Apart from Rombo High way Maliri Road which other road is shown on the map?

.....

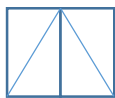
Exercise 10

The information below shows a page of a p.3 class register of teacher Namiro Theopista , Buzzy primary school

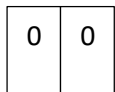
Study it carefully and then answer in full sentence, the question that follow:

Pupil's Particular			WEEK 1					WEEK 2				
Name	Age	Sex	Mon	Tue	WED	THU	Fri	Mon	Tue	WED	THU	Fri
			M	A	M	A	M	A	M	A	M	A
Acham stephen	9	F	Present	Present	Present	Present	Present	Present	Present	Present	Present	Present
Agaba Joseph	9	M	Present	Present	Present	Present	Present	Present	Present	Present	Present	Present
Apendi Stacy	9	F	Present	Present	Absent	Present	Present	Present	Present	Present	Present	Present
Bazira Byron	8	M	Absent	Absent	Present	Absent	Absent	Present	Present	Absent	Absent	Absent
Ichat Mark	8	M	Present	Present	Present	Present	Present	Present	Present	Present	Present	Present
Manja Mathew	10	M	Present	Present	Present	Present	Present	Present	Present	Present	Present	Present
Mukulu Michael	11	M	Present	Present	Present	Present	Present	Present	Present	Present	Present	Present
Mutasa Agrey	14	M	Absent	Absent	Present	Present	Present	Present	Present	Absent	Absent	Present
Namukuya Brenda	7	F	Present	Present	Present	Present	Present	Present	Present	Present	Absent	Absent
Nakubulwa sharon	12	F	Present	Present	Absent	Absent	Present	Present	Present	Present	Present	Present
Okware Max	9	M	Present	Present	Present	Present	Present	Present	Present	Absent	Absent	Present
Owino Felix	10	M	Present	Present	Present	Present	Present	Present	Present	Present	Absent	Absent
Walugonza Brian	7	M	Present	Present	Present	Present	Present	Present	Present	Absent	Absent	Present
Walugembe Brian	11		Present	Present	Present	Present	Present	Absent	Absent	Present	Absent	Absent


H
O
L
I
D
A
Y



Present in the morning and afternoon



Absent in the morning and afternoon



Male

Female

(a) Which teacher used the above register?

.....

(b) In which school was the register used?

.....
.....

(c) Who is the youngest boy in the class?

.....
.....

(d) Which pupils had the poorest attendance in class?

.....
.....

(e) Who was absent in the morning but present in the afternoon?

.....

(f) On which day did the pupils get for holiday?

.....

(g) How many pupils were present on Monday of the first week?

.....

(h) Who is the last pupil shown in the register?

.....

(i) How many pupils were never absent?

.....

(j) On which day of the two week were all the pupils present?

.....

Exercise 11

Below is a notice which appeared on the notice board of Nasta primary school on 15 October, 2014.

Study it carefully and answer, in full sentence, the question that follow.

To:	ALL PARENTS O F PRIMARY SEVEN CANDIDATES.
	YOU'RE ARE ALL LIMITED FOR P.7 CLASS
MEETING	
DATE:	20 TH OCTOBER, 2014
TIME:	2:00PM- 4.00PM. IN THE MAIN HALL
N.B	PARENTS WHO HAVE NOT CLEARED SCHOOL
	REQUIREMENTS ARE ADVISED TO DO SO BEFORE
	COMING FOR THE MEETING.
	NO CASH WILL BE ALLOWED AT SCHOOL ALL
	PAYMENT SHOULD BE MADE IN THE BANK
	MANAGEMENT.

- (a) Where can one read this information?
.....
- (b) Who are being invited?
.....
- (c) How long will the meeting take?
.....
- (d) What should parents who have not cleared school requirements do?
.....
- (e) Who wrote the notice?

.....

Exercise 12

Mr. Manyanga is a great farmer in Butunda village Kkiwato subcountry. Below are his one week diary records.

Study it carefully and then answer in full sentence, the question that follow.

Day	Date	Activity
Sun	8-11-2014	Visiting the sick and friend
Mon	9 -11-2014	Budgeting for time and money
Tue	10-211-2014	Withdrawing money from the bank
Wed	11-11-2014	Planting tomatoes and paying worker
Thur	12-11-2014	Pay water and electricity bills
Fri	13-11-2014	Selling eggs and banking money
sat	14-11-2014	Harvesting onions

(a) When did Mr. Manyenga visit the sick?

.....

(b) When did Mr. Manyenga pay his workers?

.....

(c) What did Mr. Manyenga do on Thursday?

.....

(d) Where was Mr. Manyenga on Saturday?

.....

(e) How many activities did Mr. Manyengo do that week?

.....

Exercise 13

The table below was prepared by the librarian of Nayaka primary school. It shows how pupils borrowed and returned book from the library in third term.

Study carefully and then answer, in full sentence, the questions that follow.

Name	Class	Story Book		Atlas		Bible		Dictionary	
		B	R	B	R	B	R	B	R
Achien Matilde	P. 4	√	x	-	-	√	√	-	-
Mukasa John	P. 5	-	-	√	√	-	-	√	-
Bwayo Eddy	P. 6	-	-	√	x	-	-	√	x
Mouse Adam	P7	√	√	-	-	√	√	-	-
Siem Sarah	P3	√	x	-	-	-	-	-	-
Osewe Tom	P5	√	√	-	-	√	x	√	√
Giire Ben	P6	√	√	√	x	√	x	√	√
Luwin Lawrence	P7	-	-	-	-	-	-	√	√
Kere charles	P4	√	√	-	-	√	L	-	-
KiKobo Mary	P7	√	√	√	√	-	-	√	x

Key:

B	Borrowed	-	Not borrowed/returned
R	Returned	√	yes
L	lost	x	No
Prepared by Nakalema Jane			

(a) In which school was the above table found?

.....

(b) When the table above was prepared?

.....

(c) Which pupils borrowed story books and they had not returned?

.....

(d) How many books did Kikobo Mary borrow?

.....

(e) Who borrowed two books and had not returned them?

.....
.....

(f) Who is likely to buy a new book?

.....
.....

(g) Who borrowed most books?

.....
.....

(h) How many pupils borrowed books from the library?

.....
.....

(i) Which class had the least number of pupils using the library?

.....
.....

(j) Who is the librarian?

.....
.....

Suggested answers

Exercise 1

Below is a record kept by a P7 class monitor at Divine Junior School, Nalusaga. It shows the pupils in charge of cleaning the P& classroom each morning for one week, their supervisors, and comments made each day. Study it carefully and then answer, in full sentences, the questions that follow.

WEEK FIVE, TERM TWO (2024)

Day	Pupils responsible	Supervisor	Comment
Monday	- Muluma Felix - Asio Marium - Maiso Toni	Acen Lisa	Work done well!
Tuesday	- Oketcho James - Mangara Richard - Auma Dora	Tamale Fred	Work Incomplete Part of the classroom not cleaned
Wednesday	- Mafabi Leo - Apio Liz - Oyo Joseph	Nassanga Esther	Excellent work done!
Thursday	- Sidia Sania - Akasiima Noet - Bwambale Tito	Musoke Edwin	Classroom cleaned at break time
Friday	- Candiru Joan - Chelimo Aziz - Abalo Phlona	Edema Philip	Cleaning not done. Zonal ball games

- (a) Who kept the above record?
The record was kept by a P7 class monitor at Divine Junior School, Nalusaga.
- (b) When was the above record kept?
The record was kept during week five, term two (2024).
- (c) How many pupils were in charge of cleaning the classroom each day?
Four pupils were in charge of cleaning the classroom each day.

- (d) Why work was considered incomplete on Tuesday?
The work was considered incomplete on Tuesday because part of the classroom was not cleaned.
- (e) How many pupils supervised the cleaning of the classroom that week?
Four pupils supervised the cleaning that week.
- (f) On which day was excellent work done?
Cleaning was done excellently on Wednesday.
- (g) Which pupils cleaned the classroom at break time?
Sidia Sania, Akasiima Noet and Bwambale Tito cleaned the classroom at break time.
- (h) Why wasn't the classroom cleaned on Friday?
The classroom was not cleaned on Friday because it was Zonal ball games.
- (i) What was the role of Acen Lisa according to above record?
Acen Lisa supervised the pupils cleaning the classroom on Monday.
- (j) Why would you encourage your class monitor to keep such a record?
**To ensure that there is proper cleaning of the class.
To provide evidence for the cleaning of the classroom.**

Exercise 2

The document below was used for paying school fees in one of the banks. Study it carefully and then answer, in full sentences, the questions that follow.

GRAND BANK	
BANK PAY-IN SLIP	
SCHOOL NAME: KARIBU BOARDING PRIMARY SCHOOL	
ACCOUNT NUMBER: 301000162977	
PUPIL'S NAME: KUSASIRA MARTHA	
CLASS: P7	
DATE: 18/09/2023	
NOTES/COINS	amount
50,000=	50,000/=
20,000=	80,000/=
10,000=	20,000/=
5,000=	-
2,000=	-
1,000=	-
500=	-
200=	-
100=	-
50=	-
Bank charge	3,000/=
Total	153,000/=

Total amount paid in words: One hundred fifty-three thousand shillings only

Paid in by: Nera Timothy Sign: neratim

Received by: Nalutaya Agnes

- (a) What is the above document called?
The document is called School Bank Pay-in Slip.
- (b) In which bank was the document was used?
The document was used in Grand Bank.
- (c) For which school is the above document?
The document is for KARIBU BOARDING PRIMARY SCHOOL.
- (d) Whose school fees was paid using the above document
KUSASIRA MARTHA's fees was paid using the document.
- (e) Why was it important to indicate the pupil's class on this document
Pupil's class used for proper identification of the pupil in case of another pupil with the same name.
- (f) When was the above document used?
The document was used on 18/09/2023.
- (g) How much money was paid using notes of twenty thousand shilling?
Twenty thousand shillings was paid using twenty thousand shilling notes
- (h) How much money was paid as school fees?
**One hundred and fifty thousand shillings was paid as school fees.
The fees paid was one hundred and fifty thousand shillings only.**
- (i) Who took the fees to the bank?
**Nera Timothy took the school fees.
The school fees was taken by Nera Timothy.**

Exercise 3

The Primary Seven weekly revision timetable below was found at Mt. Ogura Primary School. Study it carefully and then answer in full sentences the questions that follow.

Day	Time	Subject	Pupil in charge
Mon.	7.30pm – 9.00pm	Ennglish	Kutosi Isaac
Tue	8.00pm – 9.30pm	Mathematics	Wandira Gabby
Thur.	8.00pm – 9.00pm	Social Studies with Religious Education	Kiggundu Tendo
Fri.	7.00pm – 9.00pm	Science	Kutosi Isaac
Sat.	8.00pm – 9.00pm	English	Muyodi Presh

- (f) Where was the weekly revision time table found?
The weekly revision time table was found at Mt. Ogura Primary School.
- (g) On which day did pupils revise Social Studies with Religious Education?
Pupils revised Social Studies with Religious Education on Thursday.
- (h) How many pupils were in charge of revision that week?
Five pupils were in charge of revision that week.
- (i) Which pupil was in charge of revision on Saturday?
Muyodi Press was in charge of revision on Saturday.
- (j) For how long did the pupil revise mathematics that week?
Revision of mathematics that week took 1 hour and 30 minutes.

Exercise 4

The games and sports teacher of Atekere Junior School wrote and put the following information on the school notice board. Study it carefully and then answer in full sentences the questions that follow.

Volleyball!! Volleyball!!

Atekere Junior School versus Star Primary School

Date: 11th November 2025

Venue: Atekere Junior School playground

Time: 5.00pm – 6.35pm

Guest of Honour: MP Mbale City

Come one! Come all!

- (a) Who wrote the information?
The games and sports teacher of Atekere Junior School wrote the information.
- (b) What is the information about?
The information is about a volleyball competition between Atekere Junior School and Star Primary School.
- (c) Where will the match take place?
The match will take place at Atekere Junior School playground
- (d) At what time the match begins?
The match will begin at 5.00pm
- (e) Who is expected to be the Guest of Honour?
MP Mbale City will be the guest of honour.

Exercise 5

Below is an extract from Mukumer HealthCenter III record, taken on 27th February, 2021. Study it carefully and then answer in full sentences the questions that follow

S/N	Name of patient	Sex	Age	Disease	Comment on treatment
1.	Magunda Peter	M	50	Malaria	Given tablets
2.	Obisa Vincent	M	15	Cholera	Admitted for one week
3.	Achieng Matilda	F	85	Cough	Given tablets
4.	Drako Silver	M	2	Diarrhoea	Given oral rehydration salts and deworming
5.	Musoke Usaini	M	6	Malaria	Injections for 2 days
6.	Akware Margaret	F	30	Malaria	Injections for 2 days
7.	Tusiime Alawi	M	4	Measles	Injections for 2 days
8.	Nyayuk Mary	F	36	Diarrhoea	Given oral rehydration salts and deworming
9.	Muntu David	M	40	Tuberculosis	referred

Compiled by Dr. Paul Kibirige

- (a) From which health centre was this record extracted?
The record was extracted from Mukumer HealthCenter III.
- (b) When was the extract written?
The extract was written on 27th February, 2021.
- (c) How many patients recorded in this extract?
Nine patients are recorded in the extract.
- (d) Mention the number of female patients who received treatment from Mukumer Health Centre III.
Three female patients received treatment from Mukumer Health Centre III.
- (e) Why do you think Achieng Matilda would easily suffer from COVID-19?
She has symptoms similar to those of COVID-19 and she is old.
- (f) Why was Obisa Vincent admitted?

Obisa Vincent has cholera.

(g) What should people around this Health Centre III do to avoid malaria?

They should sleep under mosquito nets.

They should drain stagnant water

They kill mosquitoes with insecticides

(h) Which patient was not treated at this Health centre?

Muntu David was referred.

(i) Why should Drako silver and Nyaruk Mary be treated using oral rehydration salts?

Drako silver and Nyaruk Mary should be treated using oral rehydration salts because diarrhea causes dehydration

(j) Who compiled the extract?

The extract was compiled by Dr. Paul Kibirige.

Exercise 6

A health parade was conducted in Pambaya Model School during the week. This was to help learners improve on their personal hygiene. The prefects helped in the checking. Study the table below carefully and then answer in full sentences the questions that follow.

Days	Areas Checked	Class	No. of Boys	No. of Girls	Name of Prefect	Name of Supervisor (Teacher)
MONDAY	Uncombed hair	P.1	7	4	Atwine Sabiti	Mr. Masaba Isaac
		P.2	2	2	Nabirye Maureen	
		P.3	5	3	Wano Rehema	
TUESDAY	Unbrushed teeth	P.1	6	3	Akasime Michelle	Mr. Kitimbo Ian
		P.2	1	1	Mukasa Luke	
		P.3	0	0	Mugisha Ivan	
WEDNESDAY	Dirty body	P.1	8	4	Nabirye Maureen	Mrs Aisu Rehema
		P.2	2	0	Wano Rehema	
		P.3	6	4	Akasime Michelle	
FRIDAY	Dirty uniforms	P.1	16	10	Mugisha Ivan	Mr. Masaba Isaac
		P.2	5	3	Okello Eria	
		P.3	4	1	Nabirye Maureen	

***By Mrs Haumba Rehema
(Sanitation teacher)***

- Which school carried out the above activity?
Pambaya Model School carried out the activity.
- What did Atwine Sabiti do on Monday?
Atwine Sabiti checked personal hygiene in P. 1.
- How many boys had dirty bodies in P.1 on Wednesday?
Sixteen boys had dirty bodies.
- What happened to boys and girls in P.3 class on Tuesday?
They all had brushed teeth.

- (e) What was the total number of girls who had dirty uniforms?
Fourteen girls had dirty uniforms.
- (f) Which prefect checked on the personal hygiene three times?
Nabirye Maureen checked personal hygiene three times.
- (g) How many teachers supervised the exercise?
Three teachers supervised the exercise.
- (h) On which day of the week was the checking not done?
 On Thursday checking was not done.
- (i) Who was in charge of sanitation in the school?
 Mrs. Haumba Rehema was in charge of sanitation in the school.
- (j) Why do you think the school should carry out health parades?
 Health parades promote sanitation in schools.

Exercise 7

The following candidates sat PLE in Super Primary School in 2017.

Below is how they performed. Study the information carefully and then answer in full sentences the questions that follow.

Candidate's name	Index.no	Sex	Age	MTC	SST	SCI	ENG	Agg.	Div
Apio Mary	001	F	15	1	2	2	1	6	I
Ayu Damalie	002	F	12	X	X	X	X	X	CS
Nakya Lucy	003	F	11	6	2	3	2	13	II
Kajubi Daniel	004	M	17	2	1	1	2	6	I
Onapa James	005	M	13	7	7	6	2	22	II
Pesa Martha	006	F	15	2	3	3	1	9	I
Sebabi Twaha	007	M	12	3	6	4	1	14	II
Sagula Moses	008	M	13	1	1	1	1	4	I
Talemwa Tabisa	009	F	14	9	8	8	9	34	U
Welishe Hadad	010	M	15	2	X	X	1	X	X

Key:

F - female X - Absent CS - Changed school
 M - Male U - Un graded

(a) What is the advertisement about?

The advertisement is about end of year Science exhibition.

(b) Who has organized this event?

Furber organized the event

(c) Where will the event take place?

The event will take place at Boma Recreation Ground

(d) How long will the event take?

The event will take 10 hours a day for one week/seven days

(e) On what date will the event start?

The event will start on 2/12/2017.

(f) What do you think will excite children at the venue?

The children will be excited by different species of animals, snakes, birds, and face painting.

(g) Why do you think most people will arrive early?

Most people will arrive early to get free entrance.

(h) Who wrote this advertisement?

The advert was written by the management.





(i) When was the advertisement written?

The advertisement was written on 2/11/2017.

Exercise 9

The map below shows part of Rombo village. Study it carefully and then answer in full sentence, the question that follow.



	JAGWER'S POST
	POLICE POST
	BOREHOLE
	HEALTH CENTER

(a) What does the map show?

The map shows part of Rombo village.

(b) Which road would Jagwer's children take to reach school?

Rombo Highway takes Jagwer's children to school.

(c) Which building is near the borehole?

The police Post is near the borehole.

(d) What is opposite the health centre?

A forest is opposite the health centre.

(e) Apart from Rombo High way, Maliri Road which other road is shown on the map?

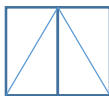
Apart from Rombo High way and Maliri Road; Market Road is shown on the map.

Exercise 10

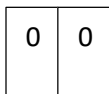
The information below shows a page of a p.3 class register of teacher Namiro Theopista , Buzzy primary school

Study it carefully and then answer in full sentence, the question that follow:


Pupil's Particular			WEEK 1					WEEK 2					H O L I D A Y	
Name	Age	Sex	Mon	Tue	WED	THU	Fri	Mon	Tue	WED	THU	Fri		
			M	A	M	A	M	A	M	A	M	A		M
Acham Stephen	9	F	△	△	△	△	△	△	△	△	△	△	△	△
Agaba Joseph	9	M	△	△	△	△	△	△	△	△	△	△	△	△
Apendi Stacy	9	F	△	△	0	△	△	△	△	△	△	△	△	△
Bazira Byron	8	M	0	0	△	△	0	0	0	0	△	△	0	0
Ichat Mark	8	M	△	△	△	△	△	△	△	△	△	△	△	△
Manja Mathew	10	M	△	△	△	△	△	△	△	△	△	△	△	△
Mukulu Michael	11	M	△	△	△	△	△	△	△	△	△	△	△	△
Mutasa Agrey	14	M	0	0	△	△	△	△	△	△	0	0	△	△
Namukuya Brenda	7	F	△	△	△	△	△	△	△	△	△	△	0	0
Nakubulwa Sharon	12	F	△	△	0	0	△	△	△	△	△	△	△	△
Okware Max	9	M	△	△	△	△	△	△	△	△	△	△	0	0
Owino Felix	10	M	△	△	△	△	△	△	△	△	△	△	△	0
Walugonza Brian	7	M	△	△	△	△	△	△	△	△	△	△	0	0
Walugembe Brian	11		△	△	△	△	△	△	0	0	△	△	0	0



Present in the morning and afternoon



Absent in the morning and afternoon



Male



Female

- (a) Which teacher used the above register?
Teacher Namiiro Theopista used the register.
- (b) In which school was the register used?
The register was used in Buzzy primary school.
- (c) Who is the youngest boy in the class?
The youngest boy was Walugonza Brian.
- (d) Which pupils had the poorest attendance in class?
Bazira Byron has the worst attendance.
- (e) Who was absent in the morning but present in the afternoon?
Apendi Stacy was absent in the morning but present in the afternoon
- (f) On which day did the pupils got for holiday?
Pupils got holiday on Friday.
- (g) How many pupils were present on Monday of the first week?
Twelve students were present on Monday the first week.
- (h) Who is the last pupil shown in the register?
The last pupil shown on the register is Walugembe Brian.
- (i) How many pupils were never absent?
Three pupils were never absent.
- (j) On which day of the two week were all the pupils present?
Tuesday first week all pupils were present.

Exercise 11

Below is a notice which appeared on the notice board of Nasta primary school on 15 October, 2014.

Study it carefully and answer, in full sentence, the question that follow.

To:	ALL PARENTS O F PRIMARY SEVEN CANDIDATES.
	YOU'RE ARE ALL LIMITED FOR P.7 CLASS MEETING
DATE:	20 TH OCTOBER, 2014
TIME:	2:00PM- 4.00PM. IN THE MAIN HALL
N.B	PARENTS WHO HAVE NOT CLEARED SCHOOL REQUIREMENTS ARE ADVISED TO DO SO BEFORE COMING FOR THE MEETING. NO CASH WILL BE ALLOWED AT SCHOOL ALL PAYMENT SHOULD BE MADE IN THE BANK MANAGEMENT.

(f) Where one can read this information?

One can read this information on the notice board of Nasta Primary School.

(g) Who are being invited?

All parents of Primary Seven Candidates of Nasta Primary School are being invited.

(h) How long will the meeting take?

The meeting will take two hours/120minutes.

(i) What should parents who have not cleared school requirements do?

Parents who have not cleared school requirement should clear them before going/coming for the meeting.

(j) Who wrote the notice?

The management of Nasta Primary School wrote the notice.

Exercise 12

Mr. Manyanga is a great farmer in Butunda village Kkiwato subcountry. Below are his one week diary records.

Study it carefully and then answer in full sentence, the question that follow.

Day	Date	Activity
Sun	8-11-2014	Visiting the sick and friend
Mon	9 -11-2014	Budgeting for time and money
Tue	10-11-2014	Withdrawing money from the bank
Wed	11-11-2014	Planting tomatoes and paying worker
Thur	12-11-2014	Pay water and electricity bills
Fri	13-11-2014	Selling eggs and banking money
Sat	14-11-2014	Harvesting onions

(a) When did Mr. Manyanga visit the sick?

Mr. Manyanga visited the sick on Sunday 8-11-2014

(b) When did Mr. Manyanga pay his workers?

Mr. Manyanga paid the worker of 11-11-2014

(c) What did Mr. Manyanga do on Thursday?

Mr. Manyanga paid water and electricity bills on Thursday

(d) Where was Mr. Manyanga on Saturday?

Mr. Manyanga was in his farm/garden on Saturday

(e) How many activities did Mr. Manyanga do that week?

Mr. Manyanga did nine activities that week

Exercise 13

The table below was prepared by the librarian of Nayaka primary school. It shows how pupils borrowed and returned book from the library in third term.

Study carefully and then answer, in full sentence, the questions that follow.

Name	Class	Story Book		Atlas		Bible		Dictionary	
		B	R	B	R	B	R	B	R
Achien Matilde	P. 4	√	x	-	-	√	√	-	-
Mukasa John	P. 5	-	-	√	√	-	-	√	-
Bwayo Eddy	P. 6	-	-	√	x	-	-	√	x
Mouse Adam	P7	√	√	-	-	√	√	-	-
Siem Sarah	P3	√	x	-	-	-	-	-	-
Osewe Tom	P5	√	√	-	-	√	x	√	√
Giire Ben	P6	√	√	√	x	√	x	√	√
Luwin Lawrence	P7	-	-	-	-	-	-	√	√
Kere charles	P4	√	√	-	-	√	L	-	-
KiKobo Mary	P7	√	√	√	√	-	-	√	x

Key:

B	Borrowed	-	Not borrowed/returned
R	Returned	√	yes
L	lost	x	No
Prepared by Nakalema Jane			

(a) In which school was the above table found?

The table is found in Nayaka primary school.

(b) When the table above was prepared?

It was prepared in third term.

(c) Which pupils borrowed story books and they had not returned?

Siem Sarah borrowed a story book which had not been returned.

(d) How many books did Kikobo Mary borrow?

Kikobo Mary borrowed five books.

(e) Who borrowed two books and had not returned them?

Giire Ben and Bwayo Eddy borrowed two books each which had not been returned.

(f) Who is likely to buy a new book?

Kere Charles is likely to buy a new book because he lost it.

(g) Who borrowed most books?

Giire Ben borrowed most of the books.

(h) How many pupils borrowed books from the library?

Ten pupils borrowed books from the library.

(i) Which class had the least number of pupils using the library?

Primary three had the least number of pupils using the library.

(j) Who is the librarian?

Nakalema Jane was the librarian.

Thank You

Dr. Bbosa Science